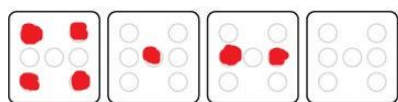



MOGU I OVO!

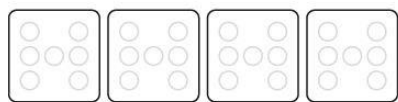
Bacaš 4 kockice. Koje vrijednosti se trebaju okrenuti na kockama da dobiješ zadani zbroj? Upiši vrijednosti pribrojnika i obojaj točkice.




$$\underline{\quad} + \underline{\quad} + \underline{\quad} + \underline{\quad} = 7$$



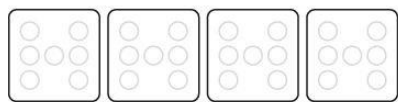
$$\underline{\quad} + \underline{\quad} + \underline{\quad} + \underline{\quad} = 8$$




$$\underline{\quad} + \underline{\quad} + \underline{\quad} + \underline{\quad} = 10$$



$$\underline{\quad} + \underline{\quad} + \underline{\quad} + \underline{\quad} = 6$$



$$\underline{\quad} + \underline{\quad} + \underline{\quad} + \underline{\quad} = 9$$



$$\underline{\quad} + \underline{\quad} + \underline{\quad} + \underline{\quad} = 12$$


Bacaš 3 kockice. Napiši na koje načine se mogu kockice okrenuti da dobiješ broj 13. Obojaj točkice.



13




$$\underline{\quad} + \underline{\quad} + \underline{\quad} = 13$$



$$\underline{\quad} + \underline{\quad} + \underline{\quad} = 13$$




$$\underline{\quad} + \underline{\quad} + \underline{\quad} = 13$$



$$\underline{\quad} + \underline{\quad} + \underline{\quad} = 13$$




$$\underline{\quad} + \underline{\quad} + \underline{\quad} = 13$$




$$\underline{\quad} + \underline{\quad} + \underline{\quad} = 13$$


Riješi i ovo! 😊



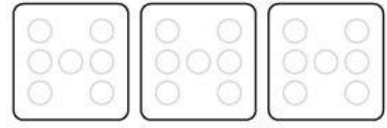
$$\underline{\quad} + \underline{\quad} + \underline{\quad} = 16$$




$$\underline{\quad} + \underline{\quad} + \underline{\quad} = 18$$




$$\underline{\quad} + \underline{\quad} + \underline{\quad} = 15$$



$$\underline{\quad} + \underline{\quad} + \underline{\quad} = 14$$



$$\underline{\quad} + \underline{\quad} + \underline{\quad} = 17$$



$$\underline{\quad} + \underline{\quad} + \underline{\quad} = 11$$