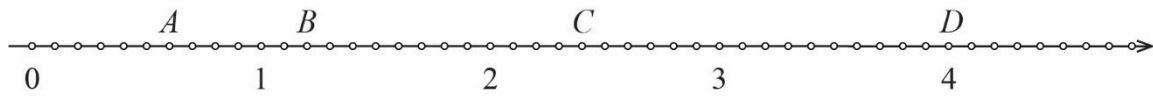


Brojevni pravac

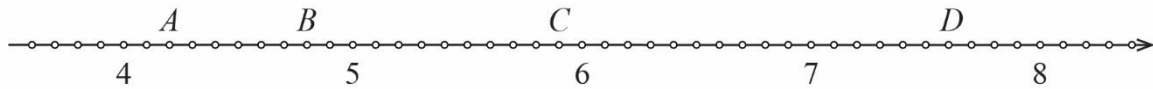
Zadatak 1.

Odčitaj brojeve pridružene točkama A , B , C i D na brojevnom pravcu.

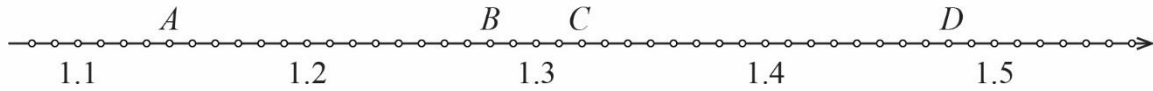
a)



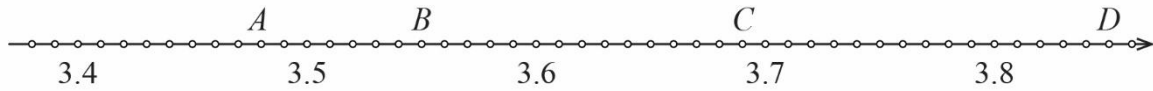
b)



c)



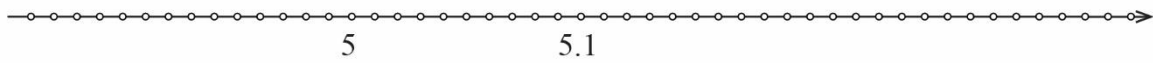
d)



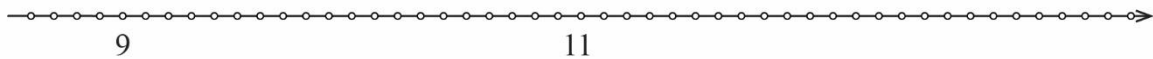
Zadatak 2.

Slovom T označi točku kojoj je pridružen navedeni broj.

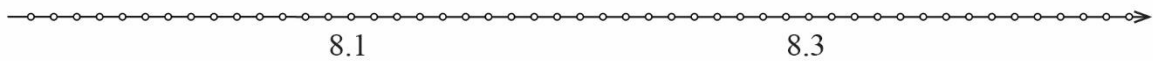
a) 5.21



b) 10.4



c) 8.22



d) 0.38

